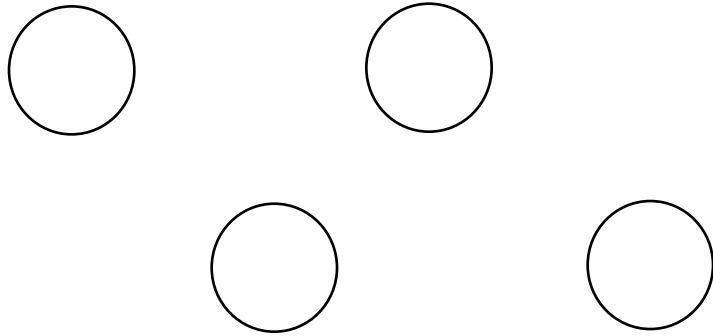
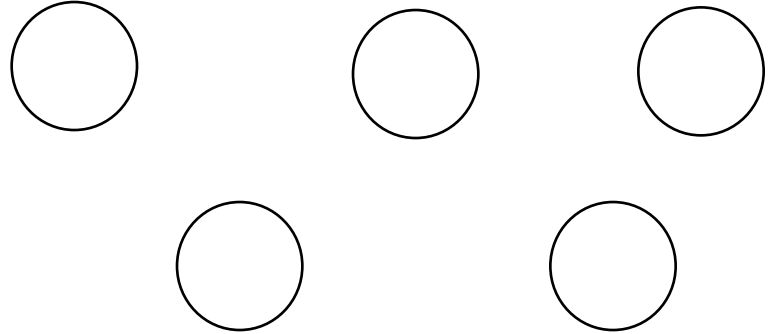


Put  on all of the dots



How many more  would you  
need to make **5** \_\_\_\_\_

Put  on all of the dots



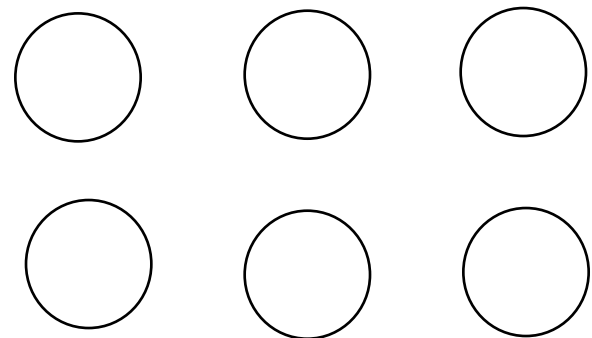
How many more  would you  
need to make **20** \_\_\_\_\_

Put  on all of the dots



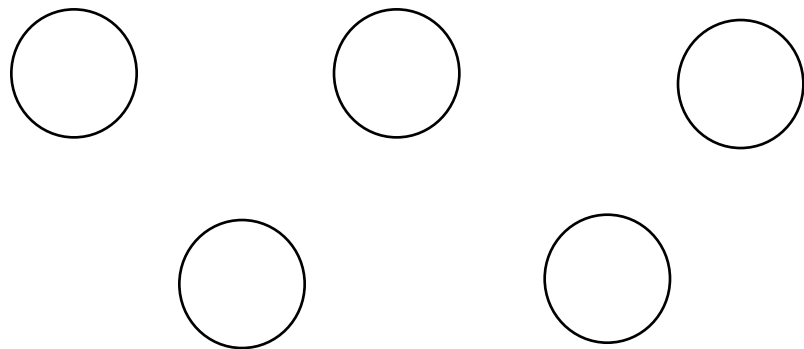
How many more  would you  
need to make **10** \_\_\_\_\_

Put  on all of the dots



How many more  would you  
need to make **15** \_\_\_\_\_

Put  on all of the dots




How many more  would you  
need to make **16** \_\_\_\_\_

Put  on all of the dots




How many more  would you  
need to make **7** \_\_\_\_\_

Put  on all of the dots




How many more  would you  
need to make **1** \_\_\_\_\_

Put  on all of the dots



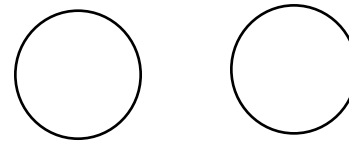
How many more  would you  
need to make **4** \_\_\_\_\_

Put  on all of the dots




How many more  would you  
need to make **11** \_\_\_\_\_

Put  on all of the dots



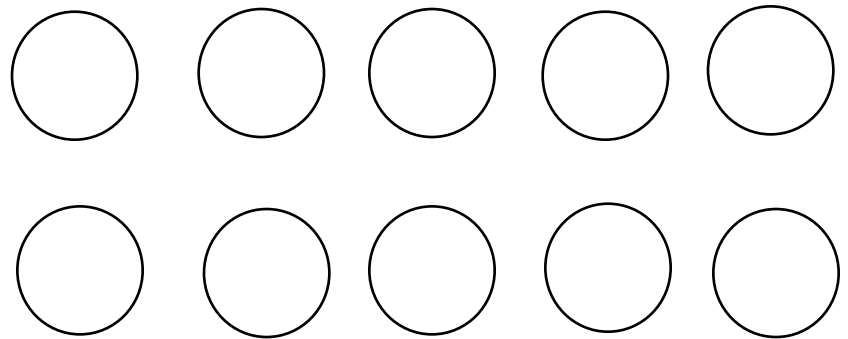
How many more  would you  
need to make **2** \_\_\_\_\_

Put  on all of the dots



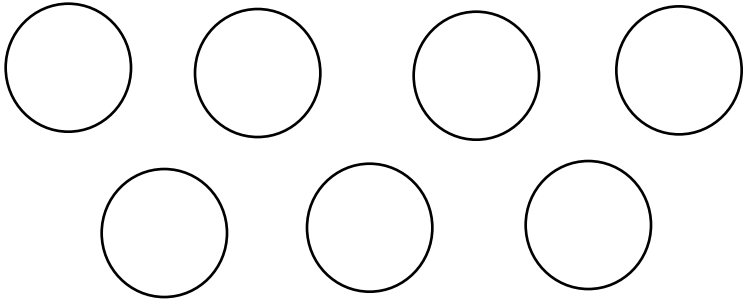
How many more  would you  
need to make **3** \_\_\_\_\_

Put  on all of the dots




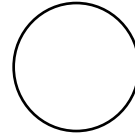
How many more  would you  
need to make **18** \_\_\_\_\_


Put  on all of the dots







How many more  would you  
need to make **17** \_\_\_\_\_

Put  on all of the dots




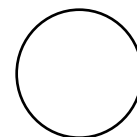
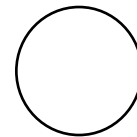


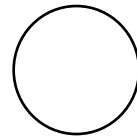
How many more  would you  
need to make **8** \_\_\_\_\_

Put  on all of the dots



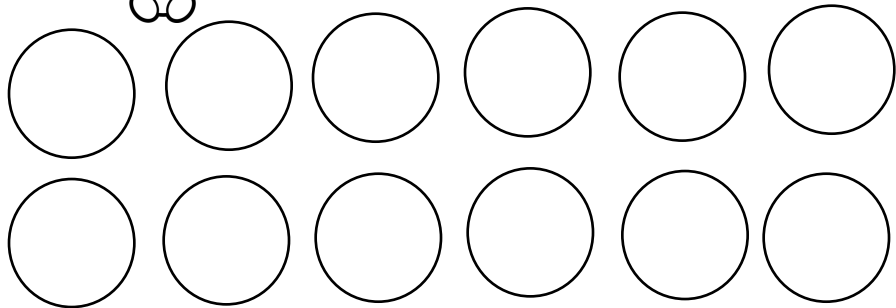
How many more  would you  
need to make **10** \_\_\_\_\_

Put  on all of the dots



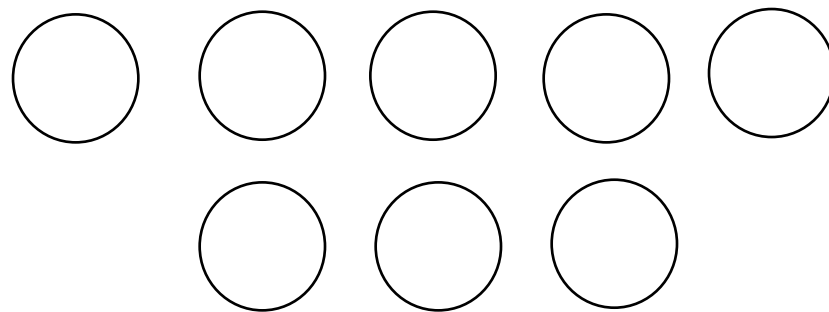
How many more  would you  
need to make **14** \_\_\_\_\_

Put  on all of the dots




How many more  would you  
need to make **19** \_\_\_\_\_

Put  on all of the dots



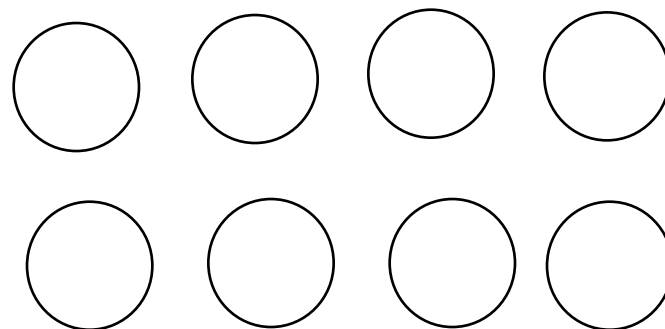
How many more  would you  
need to make **20** \_\_\_\_\_

Put  on all of the dots



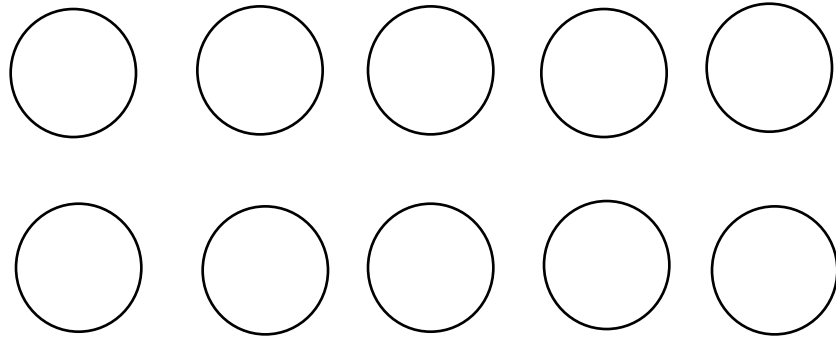
How many more  would you  
need to make **5** \_\_\_\_\_

Put  on all of the dots



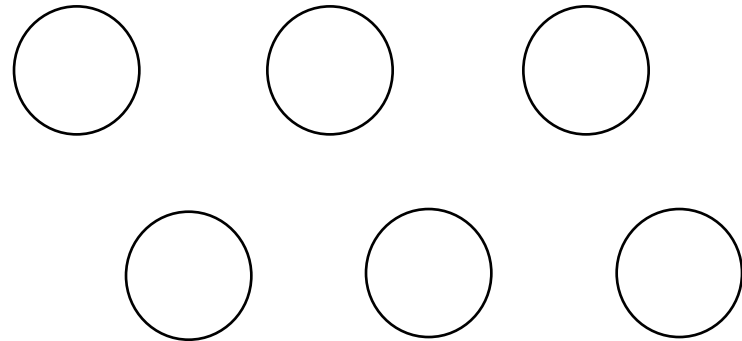
How many more  would you  
need to make **13** \_\_\_\_\_

Put  on all of the dots



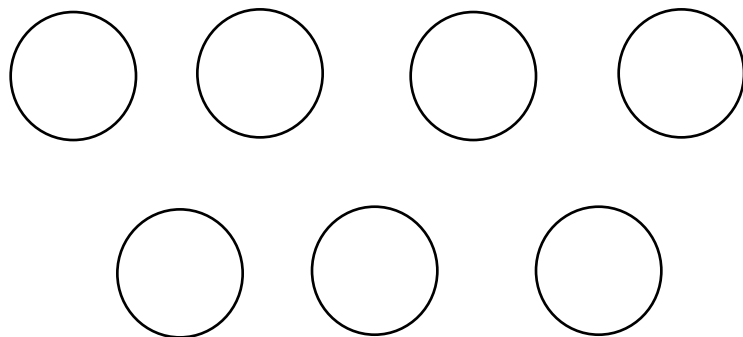
How many more  would you  
need to make **15** \_\_\_\_\_

Put  on all of the dots



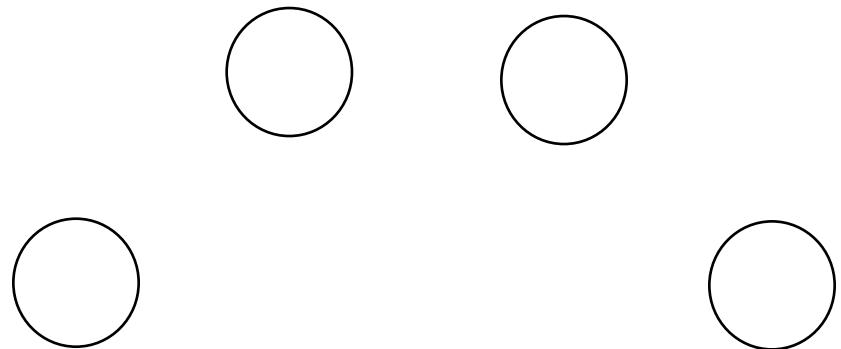
How many more  would you  
need to make **12** \_\_\_\_\_

Put  on all of the dots



How many more  would you  
need to make **9** \_\_\_\_\_

Put  on all of the dots



How many more  would you  
need to make **6** \_\_\_\_\_